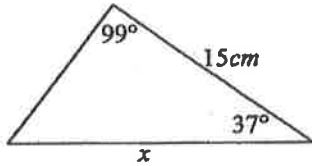


SINE LAW WORKSHEET - Practice

Show your work on loose-leaf. Round your final answers to the nearest tenth. Presentation is important 😊

1. Solve for the missing side in each triangle.

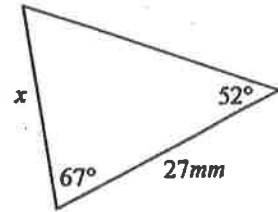
a)



b)

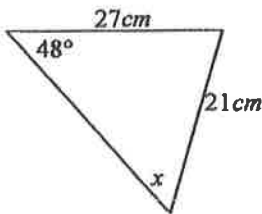


c)

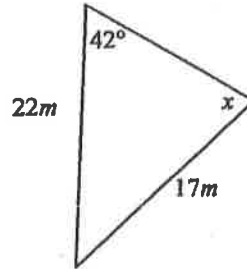


2. Solve for the missing angle in each triangle.

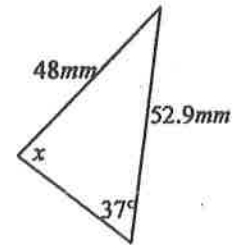
a)



b)

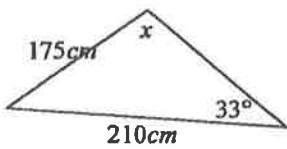


c)

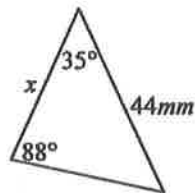


3. Solve for the unknown in each triangle.

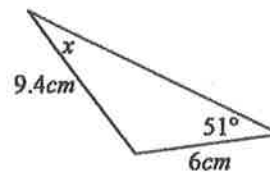
a)



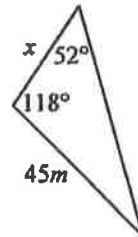
b)



c)

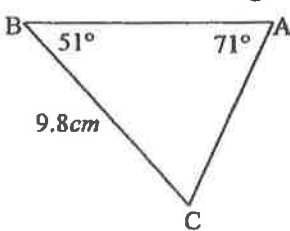


d)

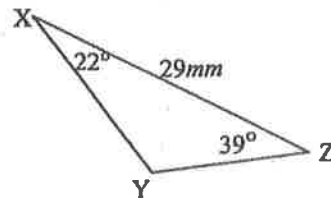


4. Solve for all missing sides and angles in each triangle.

a)



b)



c)

