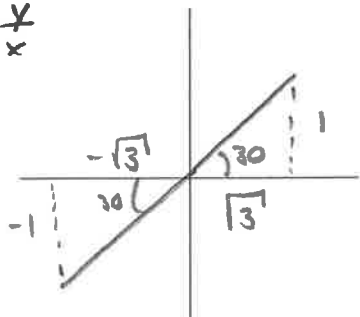
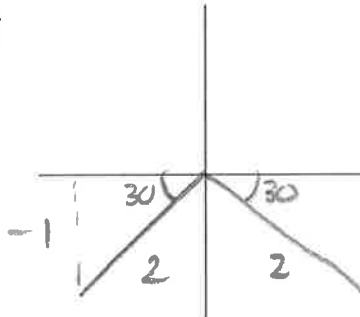
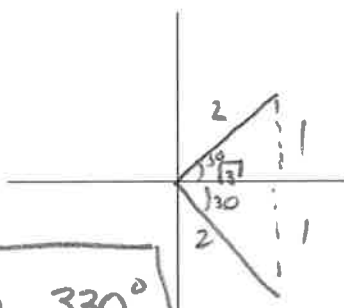
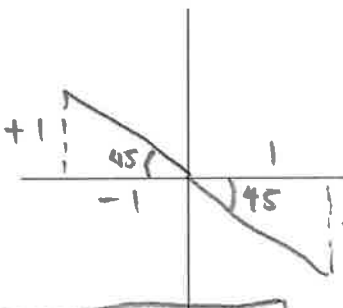


Section 7.3 – Special Angles – Final Exam PrepFind all θ , $0^\circ \leq \theta < 360^\circ$, that satisfy the following. Draw the scenario top help.

<p>1. $\tan \theta = \frac{1}{\sqrt{3}}$ ✗ 30-60-90</p>  <p>30° and 210°</p>	<p>2. $\sin \theta = -\frac{1}{2}$</p>  <p>210° and 330°</p>
<p>3. $\cos \theta = \frac{\sqrt{3}}{2}$</p>  <p>30° and 330°</p>	<p>4. $\tan \theta = -1$</p>  <p>135° and 315°</p>