




**Section 7.3 – Special Angles – Final Exam Prep**

Find all  $\theta$ ,  $0^\circ \leq \theta < 360^\circ$ , that satisfy the following. Draw the scenario top help.

<p>1. <math>\tan \theta = \frac{1}{\sqrt{3}}</math></p> 	<p>2. <math>\sin \theta = -\frac{1}{2}</math></p> 
<p>3. <math>\cos \theta = \frac{\sqrt{3}}{2}</math></p> 	<p>4. <math>\tan \theta = -1</math></p> 