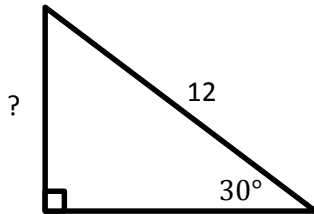


Name:

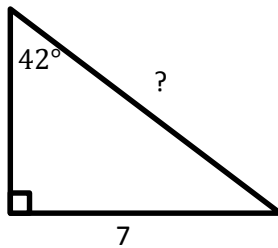
Trigonometry of Right Angle Triangles – SOH

Solve for the missing side of the right angle triangle, round to the nearest tenth.

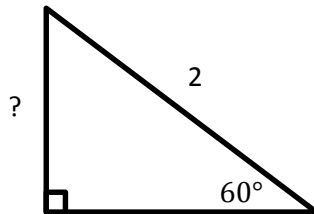
1.



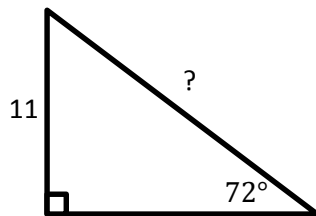
2.



3.



4.



5.

