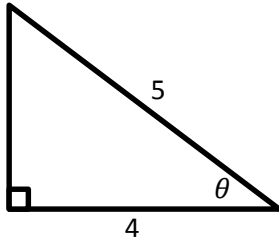


Name:

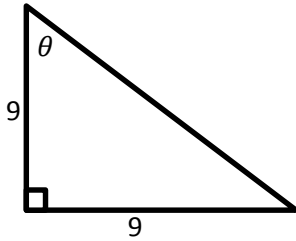
Trigonometry of Right Angle Triangles – SOH CAH TOA

Solve for the desired angle of the right angle triangle, round to the nearest tenth of a degree.

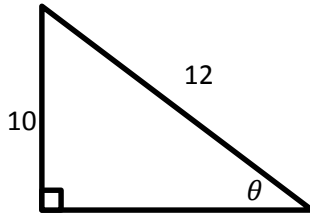
1.



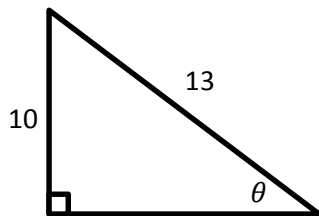
2.



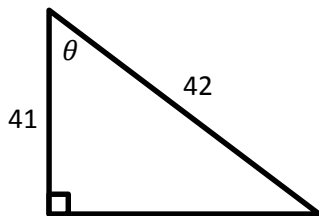
3.



4.



5.



Triangles not to scale, trust the math