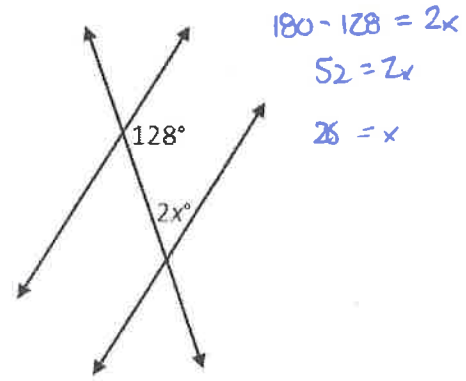


Name: KEY

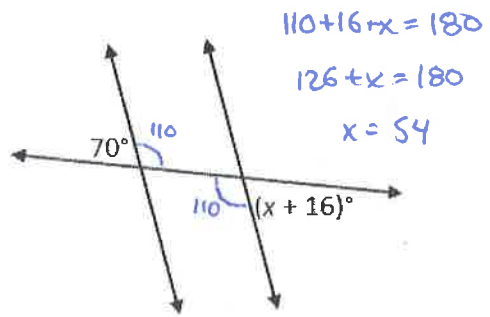
Equations and Transversals

Each figure consists of two parallel lines and a transversal. Find the values of x and y .

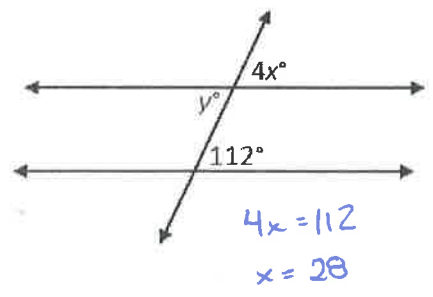
1. $x =$ 26°



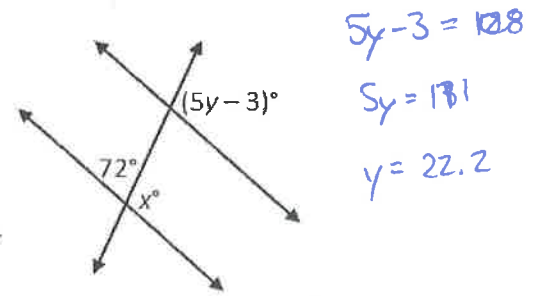
2. $x =$ 54°



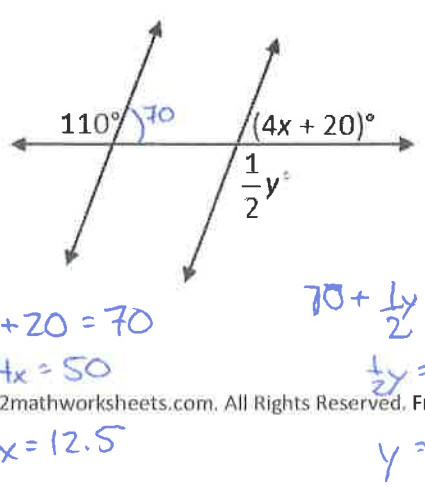
3. $x =$ 28°
 $y =$ 112°



4. $x =$ 108
 $y =$ 22.2



5. $x =$ 12.5°
 $y =$ 220°



6. $x =$ 18°
 $y =$ 106°

